

CONTENT

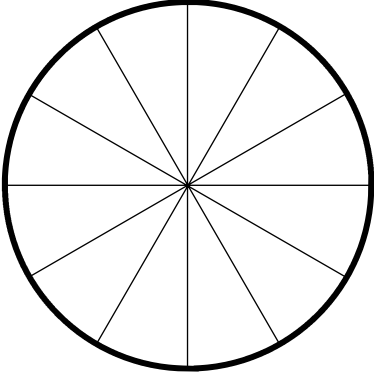
Content	III - IV
Introduction	V
What are Angles	VI - VII
The Angles circles are made From	VIII
Construction of an Angle Wheel	1
The use of an Angle Wheel	2
The use of an Angle Maker	3
Making Angles using a rope	4
Use a model clock to create angles	5
The use of Angle Wedges as angle measures	6
Cut out Angle Measures	7
Cut out Wedges (angle measures)	8
Draw Angles using Angle Measures	9
Investigating angles using Angle Measures	10
The use of Angle Measures	11
Draw some Angles using a marked clock face	12
Draw and measure Angles (clock face)	13
Revolution, Straight angle, Right angle,	14
Constructing Angles (clock face)	15
Measure angles, Acute, Obtuse, Reflex, Revolution	16
Construct angles using Angle Measures	17



Spare circles and semi circles to construct and measure angles	18
Kinds of angles	19
Draw some Right angles on dotted paper	20
Draw some Right angles on squared paper	21
Kinds of Acute and Obtuse angles	22
Draw some Acute and Obtuse angles	23
Draw some Reflex angles	24
Sort Acute and Right angles	25
Sort (match, colour) Acute, Obtuse angles	26
Draw the correct angles, Acute and Right, Obtuse angles	27
Identify angles, Right, Acute, Obtuse	28
Identify angles in Quadrilaterals	29
Connect angles with their names, Acute, Reflex	30
Connect angles with their names, Reflex, Obtuse	31
What angles are they, Obtuse, Reflex	32
Circle the correct names, Reflex, Obtuse, Acute, Straight	33
Sort angles, Acute, Obtuse, Reflex	34
Join angles with their names, Acute, Obtuse, Right, Straight, Reflex	35
Matching angles, Straight, Obtuse, Acute, Reflex, Right, Revolution	36
Measure angles with a Protractor	37
What kind of angle, all six types	38
Draw angles using a Protractor	39
Author	IX

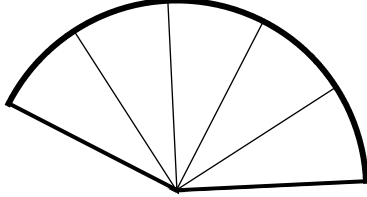
How many wedges?

revolution

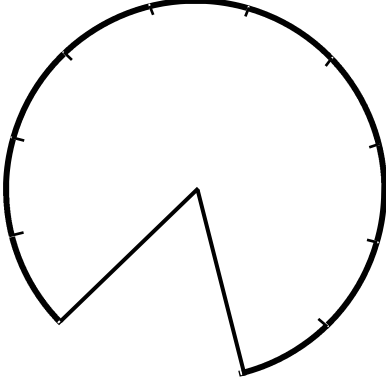
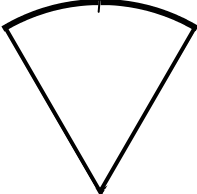
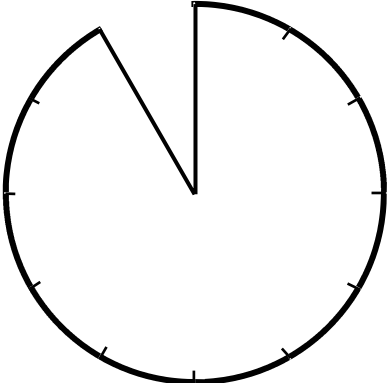
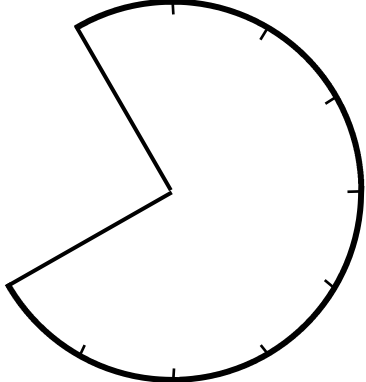
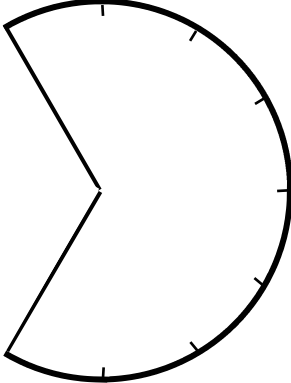
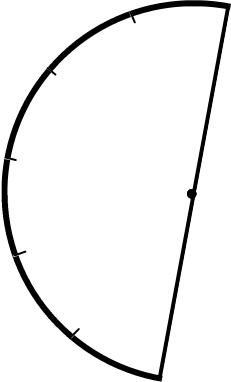
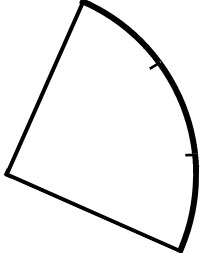
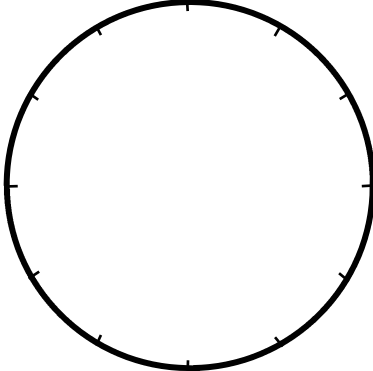
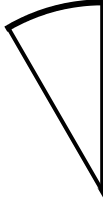


12 wedges = 360°

obtuse angle



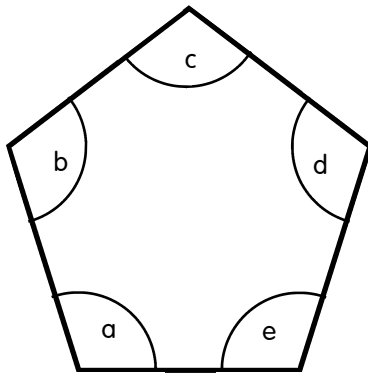

5 wedges = 150°



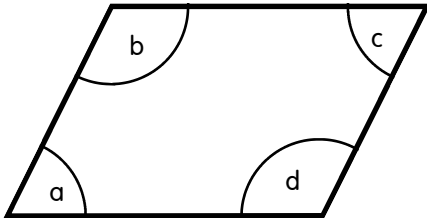
Write the sizes into the angles.
Label the angles (acute, obtuse, reflex, revolution).



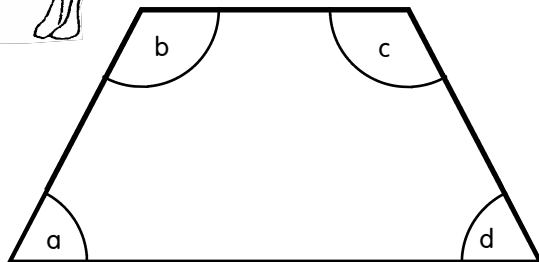
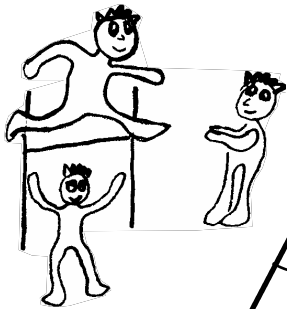
a _____
 b _____
 c _____
 d _____



a _____
 b _____
 c _____
 d _____
 e _____





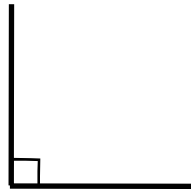


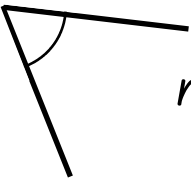

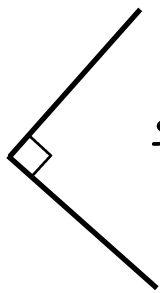



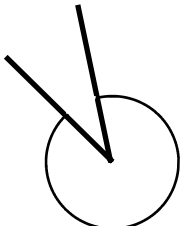
a _____
 b _____
 c _____
 d _____




a _____
 b _____
 c _____
 d _____

Identify the angles in each shape and list them in the table.

Circle the correct names.

 <p>reflex straight acute</p>	 <p>obtuse straight acute</p>	 <p>straight right acute</p>
 <p>acute right reflex</p>	 <p>right straight acute</p>	 <p>acute right obtuse</p>
 <p>right obtuse acute</p>	 <p>obtuse straight right</p>	 <p>obtuse reflex right</p>
 <p>obtuse acute reflex</p>	 <p>reflex obtuse acute</p>	 <p>obtuse right reflex</p>

 Choose and write one label for each angle.