


Content

Content	2, 3
How to use this book	4, 5
CENTS	6 - 10
How much? Use real coins to match the coins (real size) to fit the values.	6, 7, 8, 9, 10
DOLLARS	11 - 28
Fund Raising. Count the \$2 coins. Count the \$2 and \$1 coins.	11
Shopping. Count \$1 a \$2 to by an item.	13, 14, 15, 16, 17
Buying Pet Fish. Pay with \$1 coins. Pay with \$2 coins.	18, 19, 20, 21
Buying Lunch. Pay with \$2 and \$1 coins.	22, 23, 24, 25, 26
Buying a Gift. Pay with \$1 coins.	27, 28
CENTS	29 - 75
Buying Fruit. Pay for 2 pieces of fruit in 5c, 10c, 20c, 50c.	36
What Goes With What? Join coins with their matching number sentences.	37
Missing Coins. Add the missing coin to match the price.	38
How Much Is Left? Cross out coins needed and count the leftover coins.	39, 40, 41
Money In Piggybanks. Count the 10c and 5c pieces.	42
Count In 5s. Make up total amounts using 5c coins.	43
Equal Values. What coins are equal to 5c, 10c and 20c coins?	44, 45
Equal Values. What coins are used to equal 10c, 20c, 30c?	46, 47
Missing Coins. Make up the total amount using 10c or 5c coins.	48
Coins Leftover. Cross coins used, count the coins left over (5c, 10c).	49
How Much? Add 20c, 10c, and 5c.	50
Missing Coins. Fill in 5c coins to match the prices.	51
Total Cost. Add 5c and 10c coins.	52
Matching. Join the groups of coins with their matching number sentences.	53


Content

How Much? Use multiples of 10c to buy sweets. Count the coins left.	29
Counting Savings. Count the 10c coins.	30, 31
Lollipops For Sale. Count the 10c coins.	32
Savings. Count groups made of 20c and 10c.	33
Savings. Match the 10c and 5c coins with the amount in the money box.	34
Coin Values. Make up 10c, 20c and 30c by using 10c and 20.	35
Savings. Count the coins and write down the total.	54, 55
Shopping. Join each group of coins with the purchased item	56, 57
How Much? Count the 5c pieces by pairing them and turning them into 10s.	58
Leftover Coins. Count the leftover coins after buying sweets.	59
Shopping. Count out 5c pieces needed to pay for goods.	60
Monthly Savings. Count the 5c coins saved each month.	61
How Much? Join the groups of 5c coins with the matching totals.	62
Shopping. Circle the coins needed with the correct price tags.	63
How Much Is In Each Purse? Count the total of 5c pieces in each purse.	64,65
How Much Is In Each Purse? Count the total of 5c and 5c pieces in each purse.	66,67
How Much? Count on by 5s from 10c and 20c.	68
Spending Money. Count the 5c, 10c and 20c coins in each purse.	69
How Much? Count 20c and 10c pieces onto 50c.	70
How Much? Adding 2 coins.	71
How Much? Counting on from 50c or 20c.	72, 73
Money Saved. Pair 5c and then count on by 10s from 50c and add on the left over 5c.	74
Make Up \$1. Make up a dollar using 50c, 20c, 10c.	75
Abstract. Johana Meyer	76


How much?



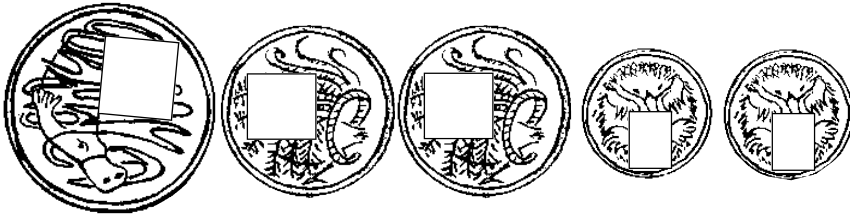
.....C



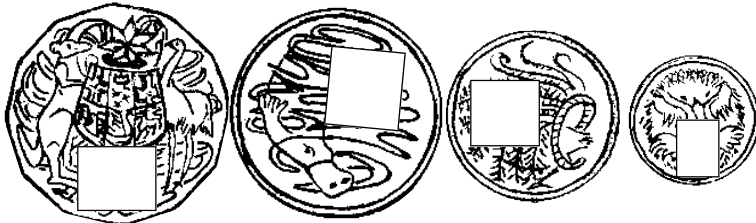
.....C



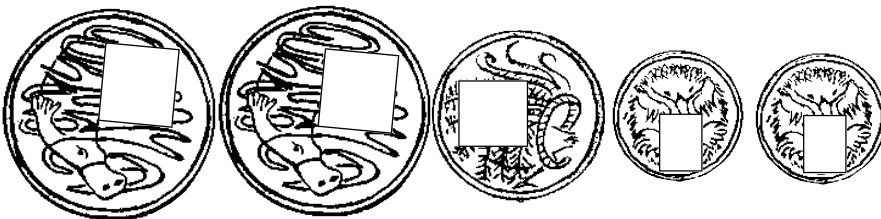
.....C



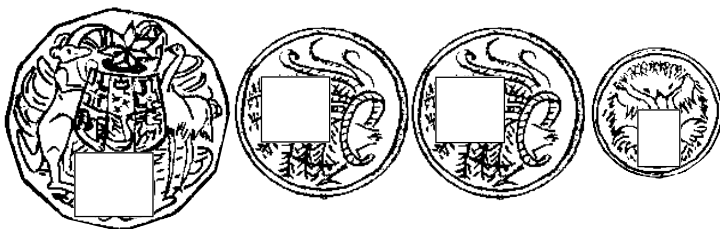
.....C



.....C



.....C

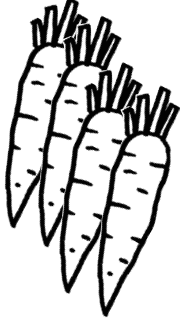

















.....C



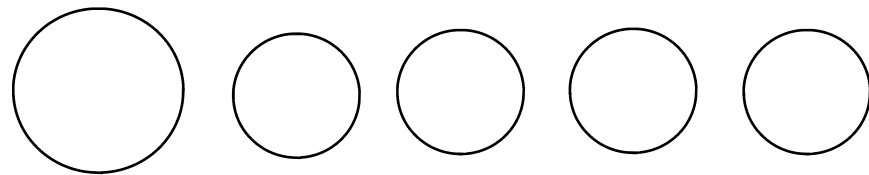
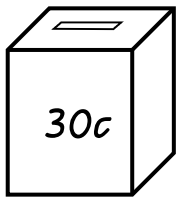
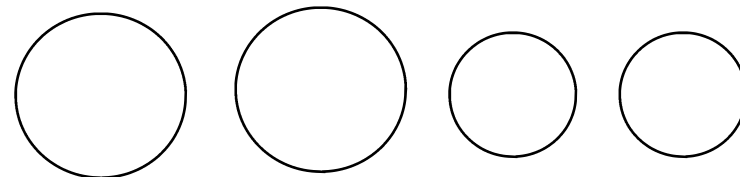
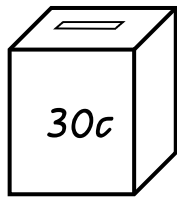

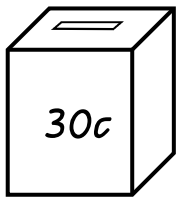
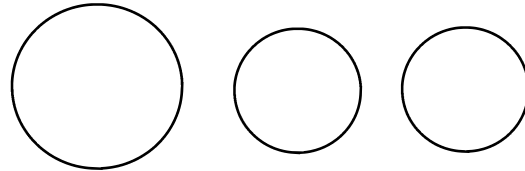
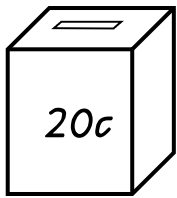
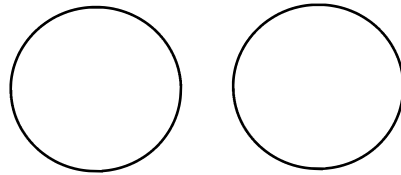
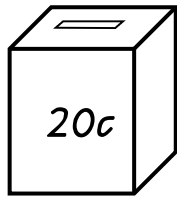
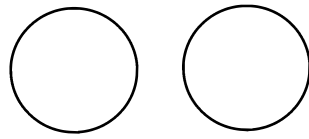
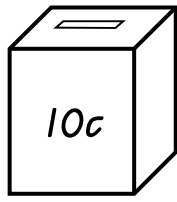
Use real coins to fill in the missing values on the coins.

At the greengrocers

 <p>\$2</p>		 <p>\$3</p>
 <p>\$4</p>		 <p>\$5</p>
 <p>\$6</p>		 <p>\$4</p>
 <p>\$3</p>		 <p>\$2</p>
 <p>\$2</p>		 <p>\$3</p>











 Connect the correct number of coins to each item. Use the nearest coins. There are some coins left over . Use count on strategy.

Saving for a treat




 Use real coins to put the correct value in each coin circle.

Coins left over

Money to spend.	I buy.	Amount left.
	A mintie.  15cC
	A lollipop.  10cC
	Toffee  10cC
	Chock  20cC
	Eclair  15cC

Remember



 Cross out the coins needed and write down the amount left over.

How much do you have?

$$\begin{array}{ccccccc} \text{5c} & + & \text{5c} & + & \text{5c} & = & \underline{\hspace{2cm}} \text{ cents} \\ \underline{5} & + & \underline{5} & + & \underline{5} & = & \underline{\hspace{2cm}} \end{array}$$

$$\begin{array}{ccccccc} \text{10c} & + & \text{5c} & + & \text{5c} & = & \underline{\hspace{2cm}} \text{ cents} \\ \underline{10} & + & \underline{5} & + & \underline{5} & = & \underline{\hspace{2cm}} \end{array}$$

$$\begin{array}{ccccccc} \text{5c} & + & \text{5c} & + & \text{10c} & = & \underline{\hspace{2cm}} \text{ cents} \\ \underline{5} & + & \underline{5} & + & \underline{10} & = & \underline{\hspace{2cm}} \end{array}$$

$$\begin{array}{ccccccc} \text{10c} & + & \text{10c} & + & \text{10c} & = & \underline{\hspace{2cm}} \text{ cents} \\ \underline{10} & + & \underline{10} & + & \underline{10} & = & \underline{\hspace{2cm}} \end{array}$$

$$\begin{array}{ccccccc} \text{5c} & + & \text{10c} & + & \text{5c} & = & \underline{\hspace{2cm}} \text{ cents} \\ \underline{5} & + & \underline{10} & + & \underline{5} & = & \underline{\hspace{2cm}} \end{array}$$

 Start counting from the 10c pieces, then count on the 5c coins.

How much?



_____ C



_____ C



_____ C




_____ C



_____ C



_____ C

 Count on: 50, 60, 70.