

CONTENTS

| | |
|---|----------------|
| Contents | III |
| Introduction | IV |
| Mini LUK Self Checking System | V |
| Progress Chart | VI |
| Addition activities expressed in words | 1 - 10 |
| How many altogether? ... <i>three boys and two girls</i> | 1 |
| What is the total of ... <i>three plus four</i> | 2 |
| How many do you have...? ... <i>four and two make</i> | 3 |
| What is the... ... <i>total of eight and four</i> | 4 |
| How many are... ... <i>two more than five</i> | 5 |
| What is the... ... <i>sum of four and three</i> | 6 |
| What do you get if you ... <i>increase eight by three</i> | 7 |
| How big if you... ... <i>enlarge nine by three</i> | 8 |
| How many if you... ... <i>double three</i> | 9 |
| What is the total of... ... <i>three and three and one</i> | 10 |
| Subtraction activities expressed in words | 11 - 20 |
| What is left? ... <i>from five take four</i> | 11 |
| What do get if you... ... <i>take three from five</i> | 12 |
| What will you get if you... ... <i>subtract two from seven</i> | 13 |
| What are the answers? ... <i>six minus three</i> | 14 |
| Find the... ... <i>difference between 2 and 9</i> | 15 - 16 |
| Find the answers... ... <i>three less than seven</i> | 17 |
| What is left if you... ... <i>decrease four by three</i> | 18 |
| How much more is... ... <i>eleven than five</i> | 19 - 20 |
| Mixed activities... ... <i>decrease or increase by...</i> | 21 |
| Mixed addition and mixed subtraction problems | 22- 23 |
| Multiplication activities expressed in words | 24 - 29 |
| What is the product of... ... <i>times three</i> | 24 |
| What is the... ... <i>product of 1 and 3</i> | 25 |
| How many in... ... <i>groups of 4</i> | 26 |
| Work out how many. ... <i>lots of or times or double...</i> | 27 |
| Find the products. ... <i>times... or groups of... or double...</i> | 28 |
| How many will you get? - <i>all mixed</i> - | 29 |
| Division activities | 30 - 36 |
| What is... ... <i>half of eighteen</i> | 30 |
| What will you have if... ... <i>you divide ten by two</i> | 31 |
| What is... ... <i>the quotient of six and three</i> | 32 |
| Divide... ... <i>eight sticks among four children</i> | 33 |
| Share your... ... <i>twelve jellybeans with dad and mum</i> | 34 |
| Mixed division problems | 35 - 36 |

What is the total of ?

1 five and five and one

2 three and three and one

3 two and two

4 six and six

5 five and five

6 four and four

7 three and three

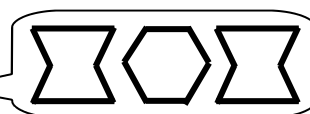


8 zero and one

9 one and one and one

10 two and two and one





11 four and four and one


12 one and one



Add (plus) the numbers and write the total in the box.

Find the answers.



| | | | |
|---|----|--------------------------|----------------------|
|  | 1 | three less than seven | <input type="text"/> |
| | 2 | four less than five | <input type="text"/> |
| | 3 | four less than ten | <input type="text"/> |
| | 4 | five less than eight | <input type="text"/> |
| | 5 | three less than fifteen | <input type="text"/> |
|  | 6 | five less than seven | <input type="text"/> |
| | 7 | two less than twelve | <input type="text"/> |
| | 8 | three less than ten | <input type="text"/> |
| | 9 | three less than eight | <input type="text"/> |
|  | 10 | two less than eleven | <input type="text"/> |
| | 11 | three less than fourteen | <input type="text"/> |
|  | 12 | four less than twelve | <input type="text"/> |



Less means take. Take the first number from the second number.

How much larger is ?

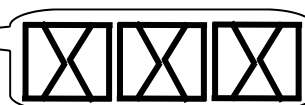
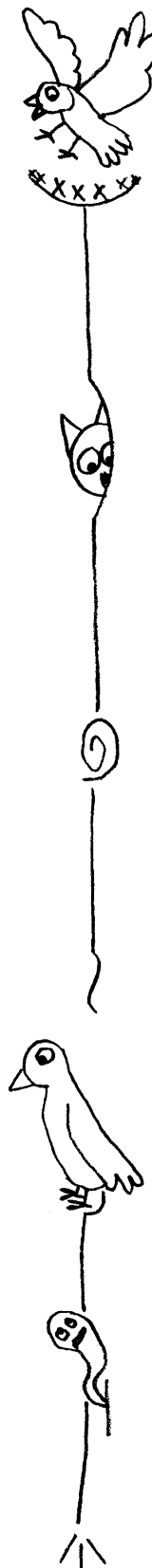
| | | |
|----|---------------------|--------------------------|
| 1 | fourteen than three | <input type="checkbox"/> |
| 2 | ten than three | <input type="checkbox"/> |
| 3 | twelve than eight | <input type="checkbox"/> |
| 4 | fifteen than three | <input type="checkbox"/> |
| 5 | twelve than three | <input type="checkbox"/> |
| 6 | ten than two | <input type="checkbox"/> |
| 7 | eleven than five | <input type="checkbox"/> |
| 8 | five than four | <input type="checkbox"/> |
| 9 | nine than six | <input type="checkbox"/> |
| 10 | eight than three | <input type="checkbox"/> |
| 11 | fifteen than five | <input type="checkbox"/> |
| 12 | six than four | <input type="checkbox"/> |



How much larger is than means to take the smaller number from the larger number.

What is

| | | |
|----|---------------------|----------------------|
| 1 | half of eight | <input type="text"/> |
| 2 | half of twelve | <input type="text"/> |
| 3 | half of two | <input type="text"/> |
| 4 | half of six | <input type="text"/> |
| 5 | half of fourteen | <input type="text"/> |
| 6 | half of ten | <input type="text"/> |
| 7 | half of eighteen | <input type="text"/> |
| 8 | half of twenty-four | <input type="text"/> |
| 9 | half of four | <input type="text"/> |
| 10 | half of twenty | <input type="text"/> |
| 11 | half of sixteen | <input type="text"/> |
| 12 | half of twenty-two | <input type="text"/> |



Half means divide the number by 2.

Work out how many.



1 double five

2 one time one

3 the product of two and three

4 three lots of threes

5 double six

6 two times one

7 three times one


8 double three plus one

9 double two plus one

10 double two

11 two fives plus one

12 double four



Double means count in 2s. Two fives means 5 and another 5. (5) (5)
Product means times.